

Assessment

Map Reading: Topographic Map











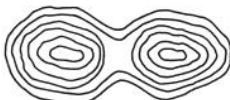

Name _____

Date _____

True or False

1. _____ Contour lines portray the shape and elevation of the land.
2. _____ An 8-digit grid coordinate is more accurate than one with six digits.
3. _____ Topographic maps portray both natural and manmade features.
4. _____ A map scale of 1:24000 means that one inch on the map represents about 200 feet on land.
5. _____ Using a Military Coordinate Scale and Protractor will allow you to find an accurate grid address

Matching

6. _____		 A
7. _____		 B
8. _____		 C
9. _____		 D
10. _____		 E
		 F